

Email: 5thdonacarney@gmail.com

Blog: www.msgerrardsclass.weebly.com

Good morning all!

Thanks for the emails & interaction this week – still a lot of you that I'd love to hear from more regularly.

Answers provided for Mental Maths and BAM activities on the blog.

Genius Scan app - allows you to take a photo of the work, converts it to PDF and you can attach multiple files in the one email. They're smaller in size too and are easier to read from my point of view.

Routines are important – break up the activities that are liked least with a PE or music activity.

Please continue to check the **blog** as I try to update it regularly throughout the week. I am adding a question for discussion this week – please use the 'comment' box to have your say! **Nobody commented this week – so I'll leave it there for another while. It would be nice to share some opinions and communication with others in the class.

I will be adding some quizzes on **Kahoot** – links will be posted on blog. Kahoot is a fun tool for assessing learning, particularly on topics we have covered so far.

I am using <https://dabbledoomusic.com/courses/813799/lectures/14875825> for some **music** ideas over the next few weeks. If you spot something on the site that you'd prefer to work on instead, please go ahead. It's a fantastic resource and free for parents at the moment.

For **Art** this week & next, you can construct 3D monsters so you will need to gather your materials = empty boxes, toilet rolls, tinfoil etc in advance and also need some Sellotape/masking tape/glue (pritt stick won't really work for card)

This week, I would especially like to receive:

1. **Gaeilge reading audios** (choose 1 of the 4 pages) – don't worry about perfect pronunciation. Listen to the mp3 to help you with some of the words and try your best.
2. **Italy** summaries
3. **Art** – even if the pieces are not completed.

If you have any questions, queries or suggestions please don't hesitate to contact me.

Stay safe everyone,

Ms. Gerrard

QUIZ QUESTIONS #3

1. In which country are Auckland and Wellington? New Zealand
2. What do Geologists study? Rocks
3. What is a young swan called? Cygnet
4. Who sings higher: a soprano or a baritone? A soprano
5. What item of clothing is a bowler? Hat
6. Under what name did Samuel L. Clemens write stories? Answer: Mark Twain
7. How many strings has the musical instrument violin? Four
8. What kind of plants do grapes grow on? Vines
9. Name the largest lake in England. Lake Windermere
10. The statue of Zeus can be found in what country? Greece
11. In a musical scale, what note follows do, re, mi? Fa
12. Name the girl who had adventures in Wonderland? Alice
13. What word completes this saying: as busy as a ___? Bee
14. Who invented the telephone? Alexander Graham Bell;
15. What is hidden during a solar eclipse for a short space of time? The Sun
16. In what country would you find Snowdonia? Wales
17. What is the name of the liquid which is also a metal and is found in thermometers? Mercury
18. Towering 305 feet high over Liberty Island off New York Harbour, what is the name of the famous statue? Statue of Liberty
19. What type of dog is bred to pull sleighs in snowy regions? Answer: Husky
20. In what sport would you receive the Davis Cup? Tennis

Monday May 18th

- **Mental Maths** unit 35 Monday & problem solving
- **Gaeilge:** LsB Ich 105, read the foclóir, read the page (aloud) and **orally** answer na ceisteanna
- **Reading: GEOGRAPHY.** Read page 48 'Italy' and answer Q1 - 8
- **Busy at Maths Chapter 30 3D shapes, page 161**

always read the examples in the boxes to help with understanding

Q1 (just write the answer – flat/solid for each sentence)

Q2 write all answers into your copy. The back of your Mental Maths book may help you with some of the names and spellings.

A little **revision:** you don't need to copy out the chart. You can just write answers. I'll do (a) for you. $7\text{g} = \frac{7}{1000}\text{kg} = 0.007\text{kg}$

2. Fill in this table.

	(a)	(b)	(c)	(d)	(e)	(f)	(g)	(h)
Grammes			720g				600g	
Fraction of kg	$\frac{7}{1000}\text{kg}$			$\frac{30}{1000}\text{kg}$		$\frac{2}{10}\text{kg}$		$\frac{1}{2}\text{kg}$
Decimal of kg		0.819kg			0.3kg			

- **Music: BJORK** <https://dabbledoomusic.com/courses/813799/lectures/14875825>
Explore – listen to 2 pieces of her music and identify similarities/differences.
- **PE:** 10 min <https://www.youtube.com/watch?v=kAXg3cMOUCw> (you might need to select your own music if you prefer!) or this **dance** (it's good fun for all the family!)
<https://www.youtube.com/watch?v=Ojblhvzvjsk>

Tuesday May 19th

- **Mental Maths** unit 35 Tuesday & problem solving
- **Gaeilge:** LsB Ich 106, read the foclóir, read the page (aloud) and **orally** answer na ceisteanna
- **Reading: GEOGRAPHY.** Read page 49 'Italy' and answer Q1 – 8 (along with yesterday's answers, this should provide a nice summary of the important facts).
- **Busy at Maths Chapter 30 3D shapes, page 162**
Q1 (back of your Mental Maths book may help)
- Linking **Art** with Maths – you can draw a sketch of what you think your 3D monster should look like and make a list of the materials you will need to make it. You will work on this over the **next 2 weeks.**



OR if you just want a simple but effect 3D drawing follow the instructions here

<https://www.youtube.com/watch?v=YNEXzvnD7ml>

This has been very successful when I have done this in class previously.

- **PE:** 10 min <https://www.youtube.com/watch?v=kAXg3cMOUCw> (you might need to select your own music if you prefer!) or this **dance** (it's good fun for all the family!)
<https://www.youtube.com/watch?v=Ojblhvzvjsk>

Wednesday May 20th

- **Mental Maths** unit 35 Wednesday & problem solving
- **Gaeilge:** LsB Ich 107, read the foclóir, read the page (aloud) and **write the answers** do na ceisteanna
- **Reading: GEOGRAPHY.** Read page 54 'Italy' and write 3 facts about Leonardo da Vinci and 3 facts about Michelangelo.
- **Busy at Maths Chapter 30 3D shapes, page 163, Q 1 - 4**
make sure by the end you know the difference between a prism and a pyramid
- **Music: DAFT PUNK** lesson (think about and orally answer questions)
<https://dabledoomusic.com/courses/813799/lectures/14809065>

- **Art:** continue work for 3D art monster – finish sketch/begin to gather materials/begin assembly



- **PE:** 10 min
<https://www.youtube.com/watch?v=xj7TQ6xTjnU> (you might need to select your own music if you prefer!) or this **dance** (it's good fun for all the family!)
<https://www.youtube.com/watch?v=Ojblhvzvjsk>

Thursday May 21st

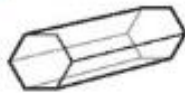
- **Mental Maths** unit 35 Thursday and problem solving
- **Gaeilge:** LsB Ich 108, read the foclóir, read the page (aloud) and **orally answer** do na ceistanna **Or** watch <https://www.cula4.com/en/watch/player/?pid=6095251899001&teideal=Mo%20Shaol%20Do%20Shaol&series=Mo%20Shaol%20Do%20Shaol&dlft=1593> (12 mins)
- **Reading: GEOGRAPHY.** Read page 55 'Italy' and answer Q 1 - 7
- **Busy at Maths Chapter 30 3D shapes, pg 165 Q2, 3**
always read the examples in the boxes to help with understanding
and write the answers to these (from the Shadow book)

2. Name the shapes.

(a)



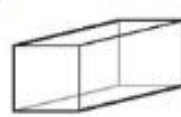
(b)



(c)



(d)

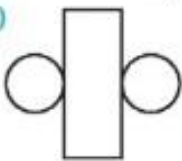


(e)

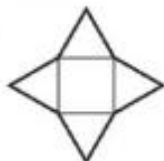


3. What 3-D shape can be made from each of these nets?

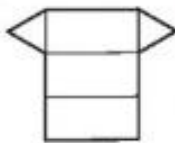
(a)



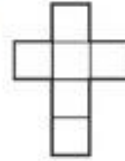
(b)



(c)



(d)



(e)



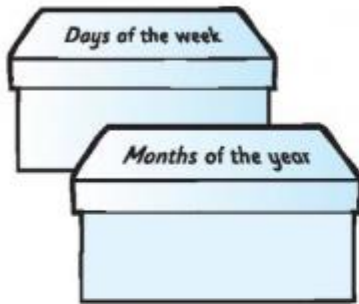
- **Art:** continue work for 3D art monster – finish sketch/begin to gather materials/begin assembly

Friday May 22nd

- **Mental Maths** unit 35 Friday test
- **Quiz Questions!** Get someone to test you!
- **Maths:** write the answers

Chance

1. Express as a fraction the chances of the following being picked at random from the boxes.



- (a) The month picked is September: $\frac{1}{12}$
- (b) The month picked is during summer: _____
- (c) The day picked falls on a weekend: _____
- (d) The month has the letter 'r' in it: _____
- (e) If a weekday is picked, the chances it begins with the letter 't': _____
- (f) If the month picked has 30 days, the chance it is June: _____

2. If you threw a dart randomly at the board, write as a fraction the chance of...



- (a) hitting an even number: _____
- (b) hitting a number greater than 15: _____
- (c) hitting a prime number: _____
- (d) hitting a number in the 4 times table: _____
- (e) if you hit an odd number, that the number is a square number: _____

- **SPHE** <https://www.otb.ie/wp-content/uploads/2020/04/At-Home-with-Weaving-Well-being-A-Mental-Health-Journal-for-Kids.pdf> Please complete **pgs 1 and 2**

You are familiar already with your Weaving Wellbeing book. This is a nice journal to complete at home. It's not really necessary to print all the pages – you can draw/write most of them into your copy. If you have a spare copy at home, it might be best to keep all this work together.

- **Art:** continue work for 3D art monster – finish sketch/begin to gather materials/begin assembly
- **PE:** 10 min <https://www.youtube.com/watch?v=xj7TQ6xTjnU> (you might need to select your own music if you prefer!) or this **dance** (it's good fun for all the family!) <https://www.youtube.com/watch?v=Ojblhvzvjsk>